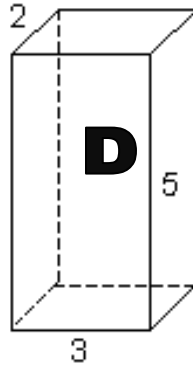
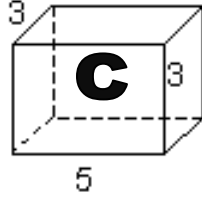
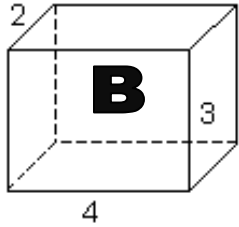
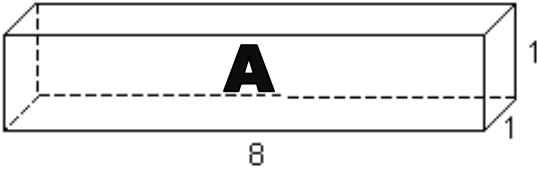


Pre-Lab: Determine the volume of the following shapes using the formula $L \times W \times H$.



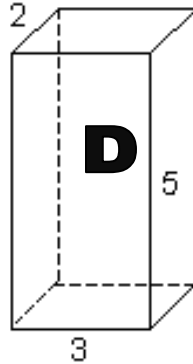
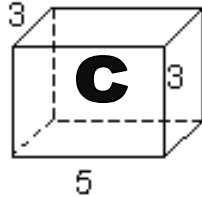
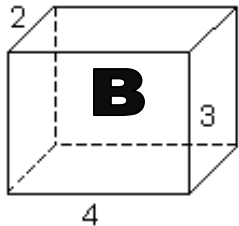
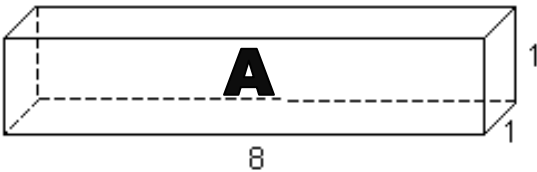
A = _____ cm^3

B = _____ cm^3

C = _____ cm^3

D = _____ cm^3

Pre-Lab: Determine the volume of the following shapes using the formula $L \times W \times H$.



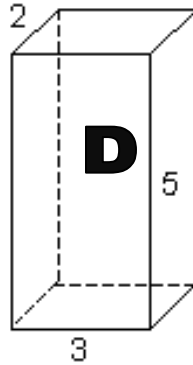
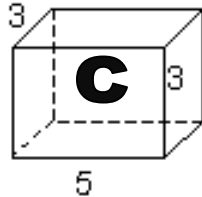
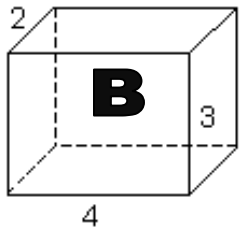
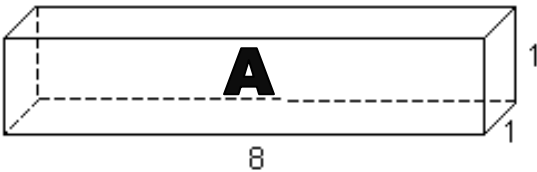
A = _____ cm^3

B = _____ cm^3

C = _____ cm^3

D = _____ cm^3

Pre-Lab: Determine the volume of the following shapes using the formula $L \times W \times H$.



A = _____ cm^3

B = _____ cm^3

C = _____ cm^3

D = _____ cm^3